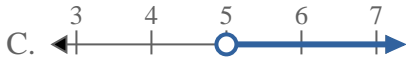


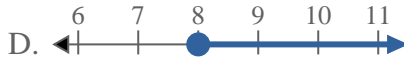
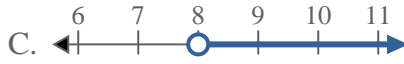
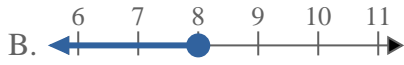
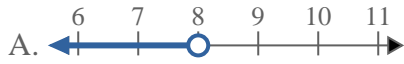


Solve each problem.

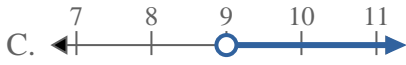
1) Which option best shows $X < 5$



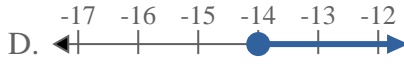
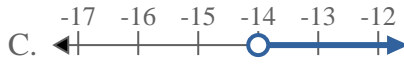
2) Which option best shows $X < 8$



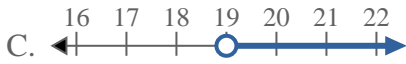
3) Which option best shows $X \geq 9$



4) Which option best shows $X > -14$



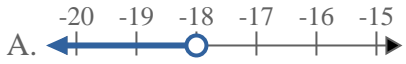
5) Which option best shows $X < 19$



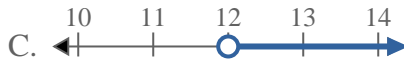
6) Which option best shows $X < 4$



7) Which option best shows $X > -18$



8) Which option best shows $X > 12$



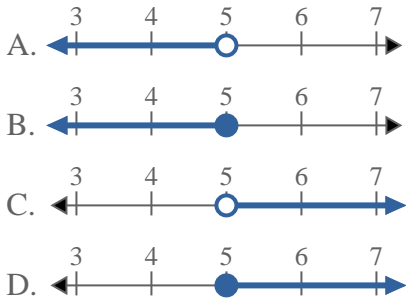
Answers

1. _____
2. _____
3. _____
4. _____
5. _____
6. _____
7. _____
8. _____

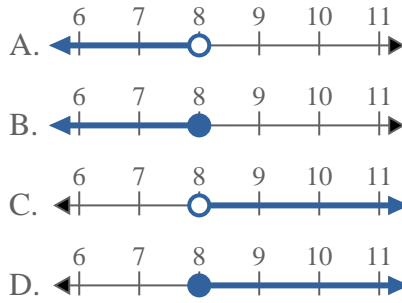


Solve each problem.

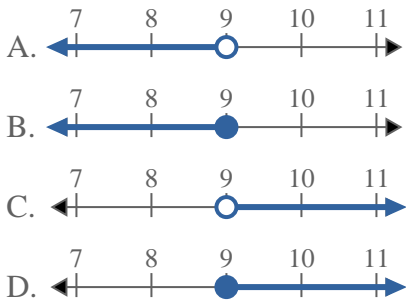
1) Which option best shows $X < 5$



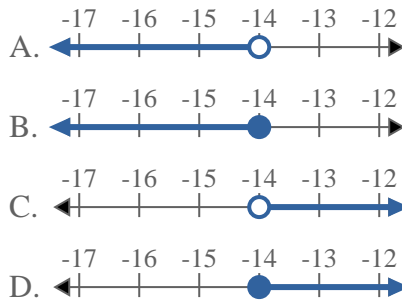
2) Which option best shows $X < 8$



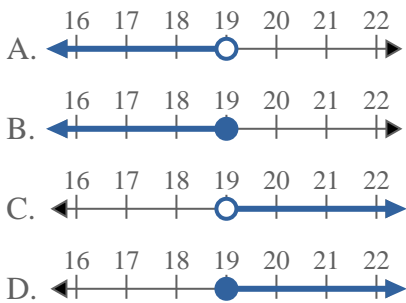
3) Which option best shows $X \geq 9$



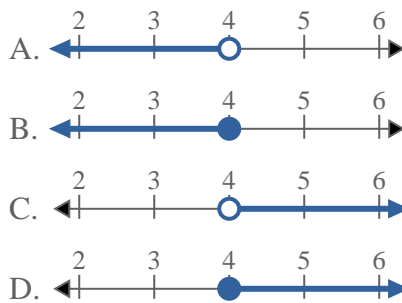
4) Which option best shows $X > -14$



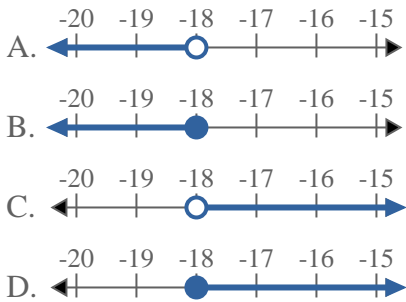
5) Which option best shows $X < 19$



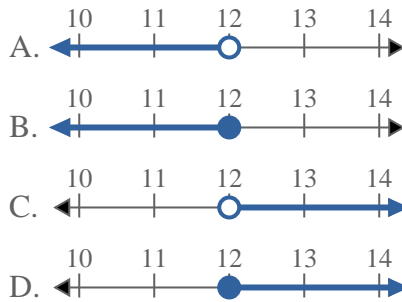
6) Which option best shows $X < 4$



7) Which option best shows $X > -18$



8) Which option best shows $X > 12$



Answers

1. **A**
2. **A**
3. **D**
4. **C**
5. **A**
6. **A**
7. **C**
8. **C**