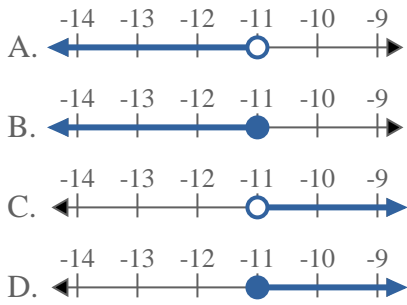


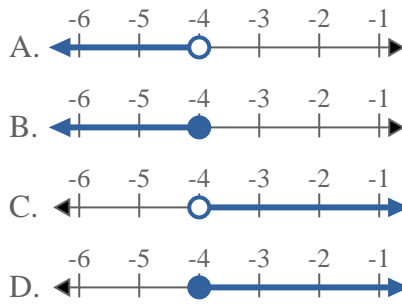


Solve each problem.

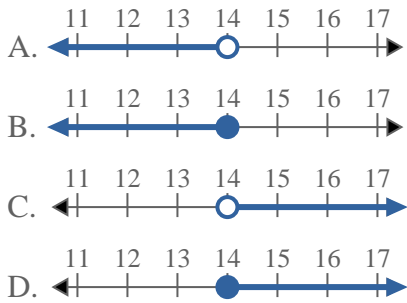
1) Which option best shows  $X < -11$



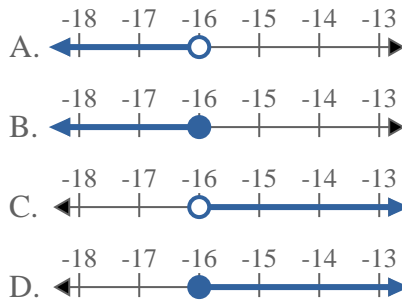
2) Which option best shows  $X \leq -4$



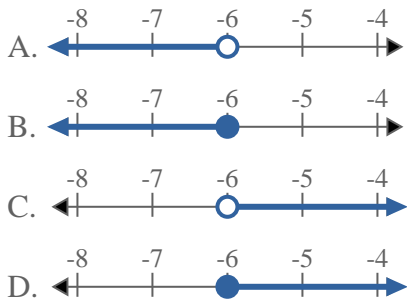
3) Which option best shows  $X > 14$



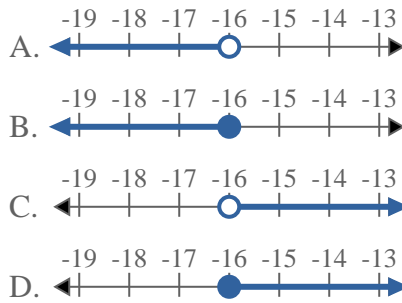
4) Which option best shows  $X \leq -16$



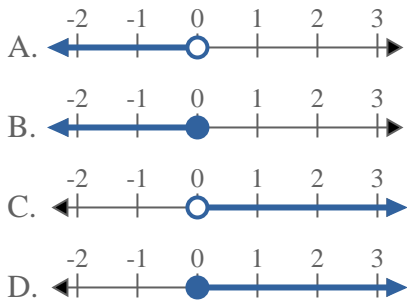
5) Which option best shows  $X > -6$



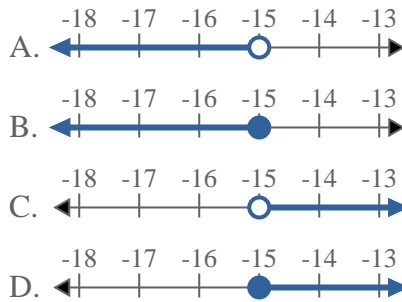
6) Which option best shows  $X \geq -16$



7) Which option best shows  $X \geq 0$



8) Which option best shows  $X \geq -15$



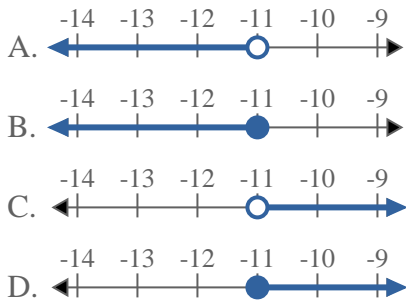
Answers

1. \_\_\_\_\_
2. \_\_\_\_\_
3. \_\_\_\_\_
4. \_\_\_\_\_
5. \_\_\_\_\_
6. \_\_\_\_\_
7. \_\_\_\_\_
8. \_\_\_\_\_

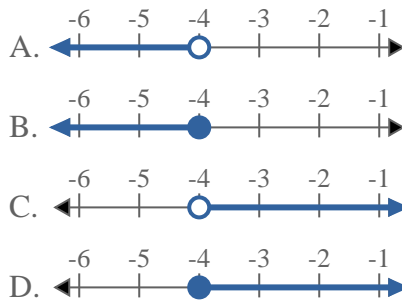


Solve each problem.

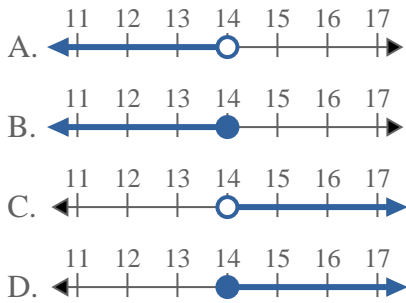
1) Which option best shows  $X < -11$



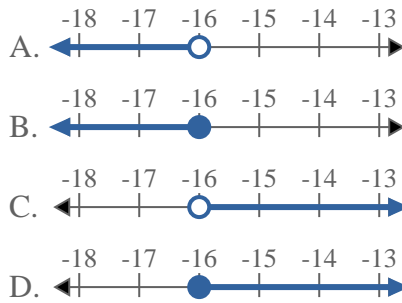
2) Which option best shows  $X \leq -4$



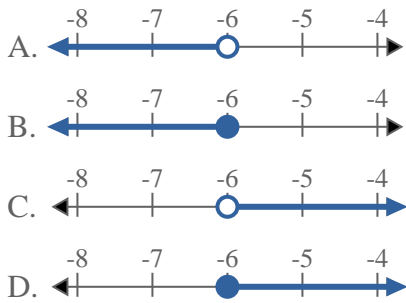
3) Which option best shows  $X > 14$



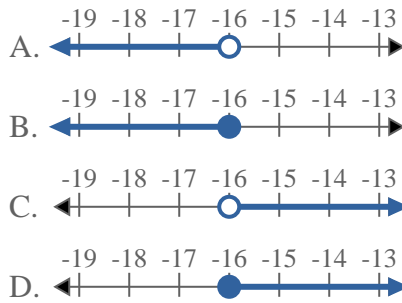
4) Which option best shows  $X \leq -16$



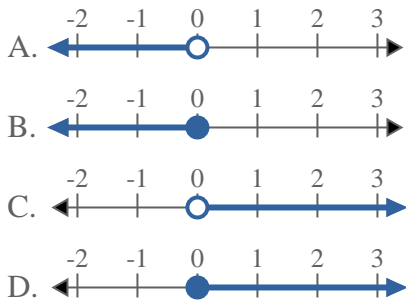
5) Which option best shows  $X > -6$



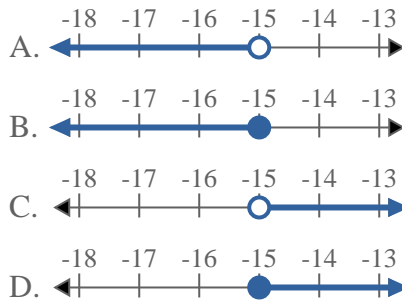
6) Which option best shows  $X \geq -16$



7) Which option best shows  $X \geq 0$



8) Which option best shows  $X \geq -15$



Answers

1.     **A**
2.     **B**
3.     **C**
4.     **B**
5.     **C**
6.     **D**
7.     **D**
8.     **D**