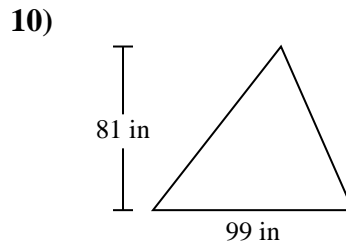
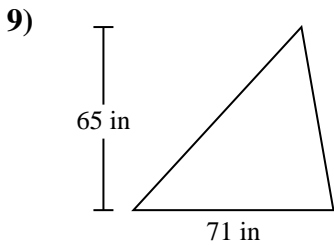
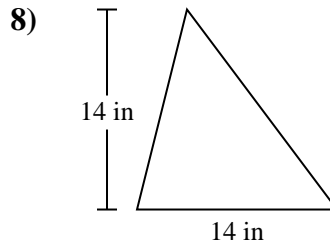
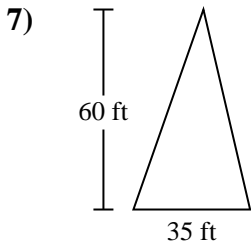
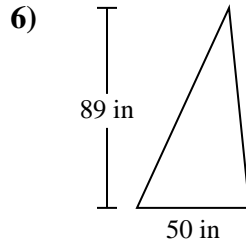
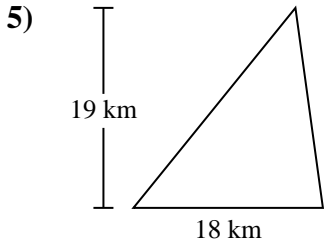
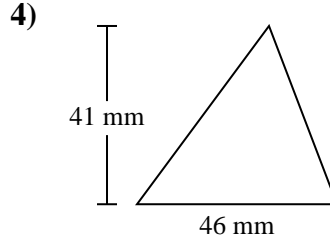
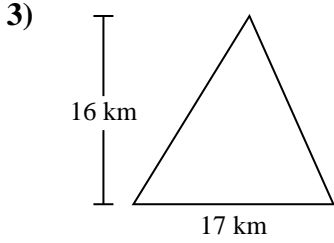
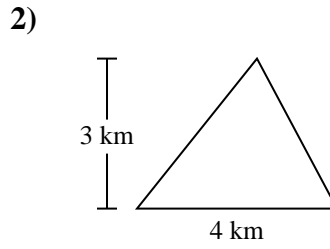
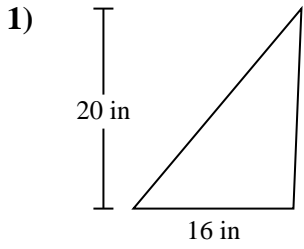




Find the area of each triangle. Units are not to scale.

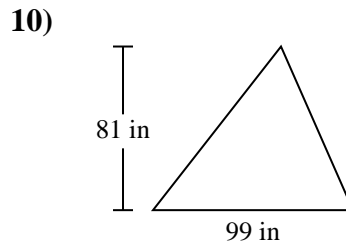
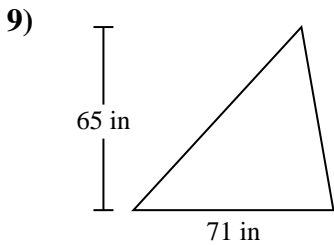
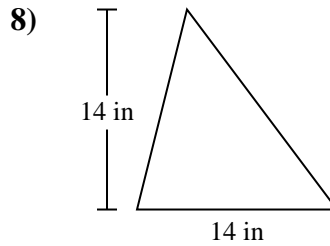
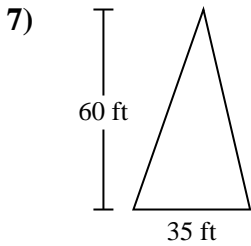
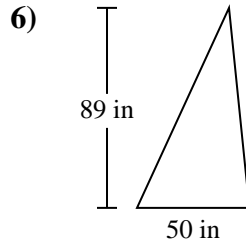
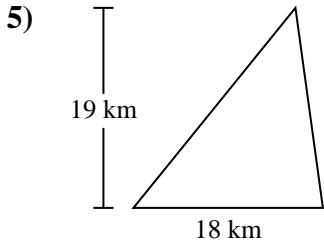
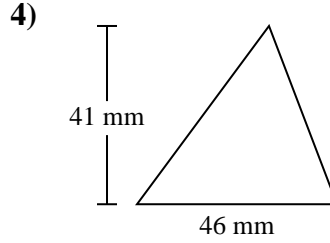
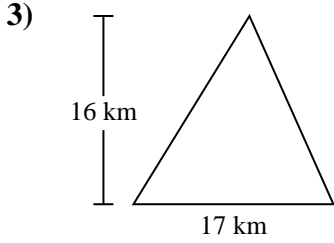
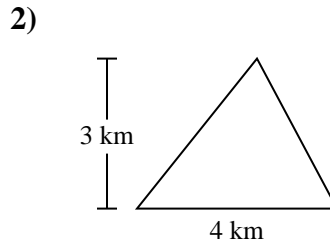
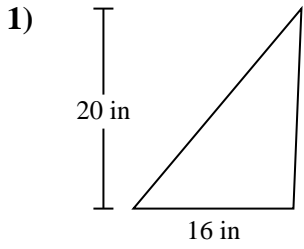


Answers

- 1. \_\_\_\_\_
- 2. \_\_\_\_\_
- 3. \_\_\_\_\_
- 4. \_\_\_\_\_
- 5. \_\_\_\_\_
- 6. \_\_\_\_\_
- 7. \_\_\_\_\_
- 8. \_\_\_\_\_
- 9. \_\_\_\_\_
- 10. \_\_\_\_\_



Find the area of each triangle. Units are not to scale.



**Answers**

1. 160 in<sup>2</sup>
2. 6 km<sup>2</sup>
3. 136 km<sup>2</sup>
4. 943 mm<sup>2</sup>
5. 171 km<sup>2</sup>
6. 2,225 in<sup>2</sup>
7. 1,050 ft<sup>2</sup>
8. 98 in<sup>2</sup>
9. 2,307.5 in<sup>2</sup>
10. 4,009.5 in<sup>2</sup>



Find the area of each triangle. Units are not to scale.

**Answers**

98	160	2,307.5	171
136	6	4,009.5	943
1,050	2,225		

1. \_\_\_\_\_
2. \_\_\_\_\_
3. \_\_\_\_\_
4. \_\_\_\_\_
5. \_\_\_\_\_
6. \_\_\_\_\_
7. \_\_\_\_\_
8. \_\_\_\_\_
9. \_\_\_\_\_
10. \_\_\_\_\_

