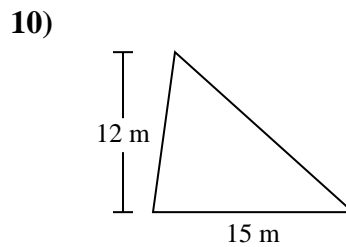
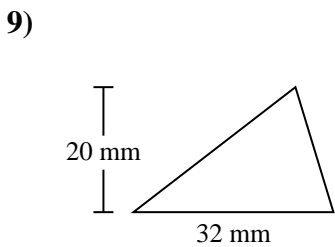
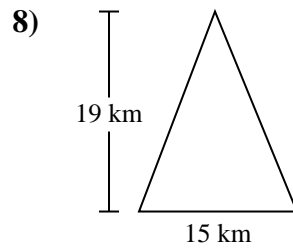
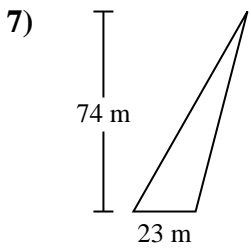
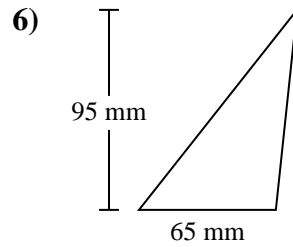
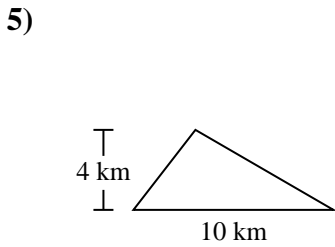
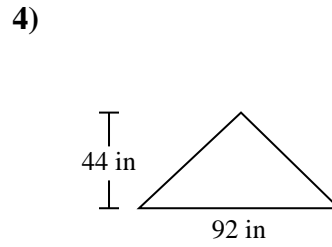
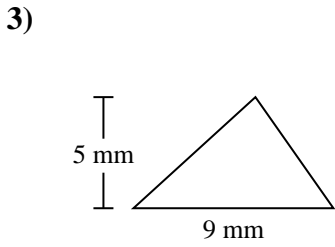
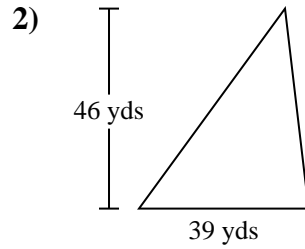
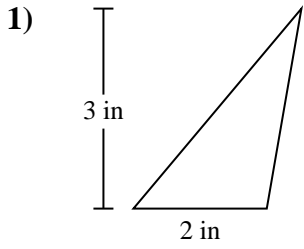




Find the area of each triangle. Units are not to scale.

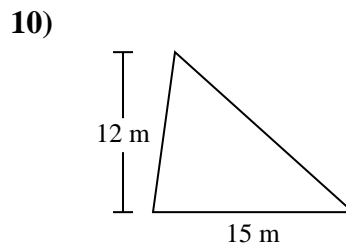
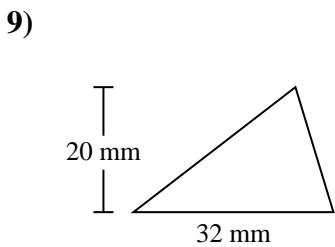
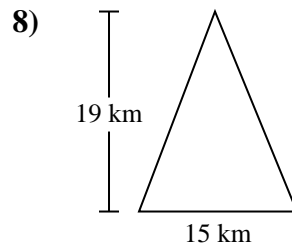
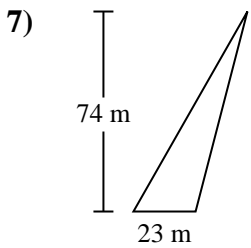
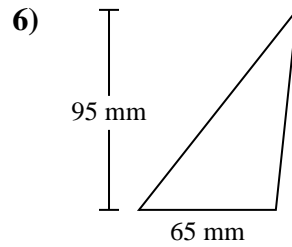
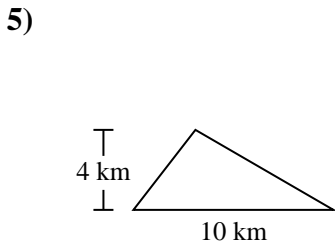
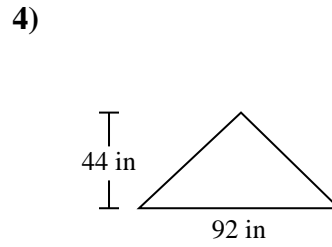
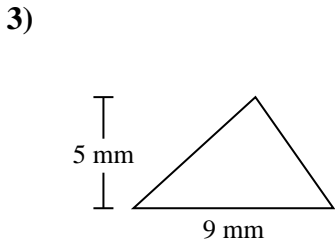
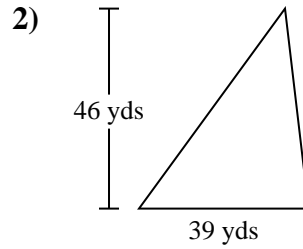
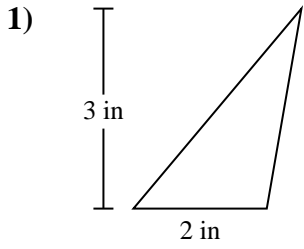


Answers

1. \_\_\_\_\_
2. \_\_\_\_\_
3. \_\_\_\_\_
4. \_\_\_\_\_
5. \_\_\_\_\_
6. \_\_\_\_\_
7. \_\_\_\_\_
8. \_\_\_\_\_
9. \_\_\_\_\_
10. \_\_\_\_\_



Find the area of each triangle. Units are not to scale.



Answers

1. 3 in<sup>2</sup>

2. 897 yds<sup>2</sup>

3. 22.5 mm<sup>2</sup>

4. 2,024 in<sup>2</sup>

5. 20 km<sup>2</sup>

6. 3,087.5 mm<sup>2</sup>

7. 851 m<sup>2</sup>

8. 142.5 km<sup>2</sup>

9. 320 mm<sup>2</sup>

10. 90 m<sup>2</sup>



Find the area of each triangle. Units are not to scale.

22.5	142.5	20	90
2,024	3,087.5	320	851
897	3		

**Answers**

1. \_\_\_\_\_
2. \_\_\_\_\_
3. \_\_\_\_\_
4. \_\_\_\_\_
5. \_\_\_\_\_
6. \_\_\_\_\_
7. \_\_\_\_\_
8. \_\_\_\_\_
9. \_\_\_\_\_
10. \_\_\_\_\_

