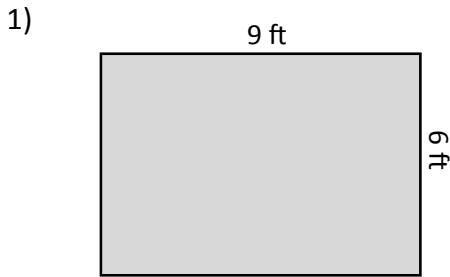


Name: _____

Score: _____

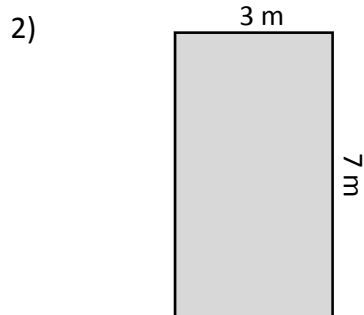
Area and Perimeter of Rectangles

Find the area and perimeter of each rectangle.



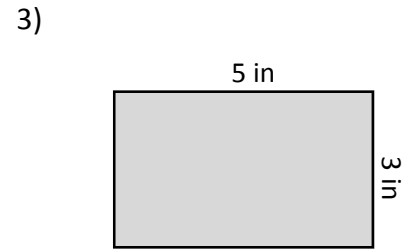
Area = _____

Perimeter = _____



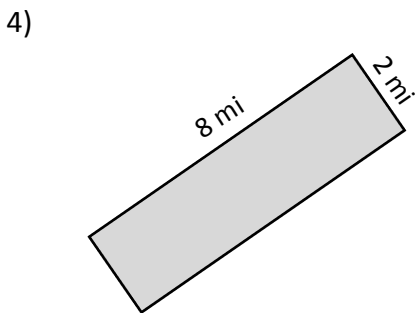
Area = _____

Perimeter = _____



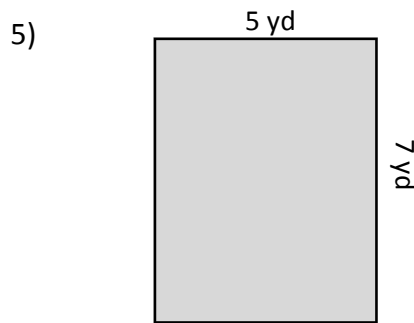
Area = _____

Perimeter = _____



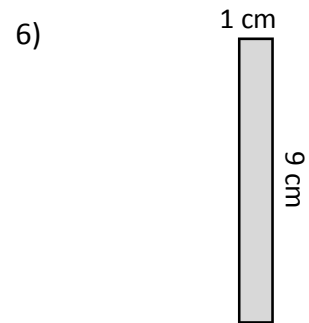
Area = _____

Perimeter = _____



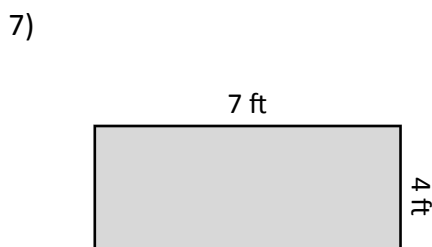
Area = _____

Perimeter = _____



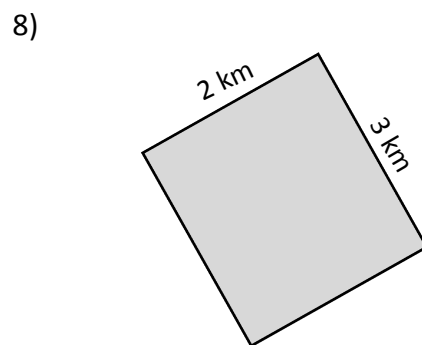
Area = _____

Perimeter = _____



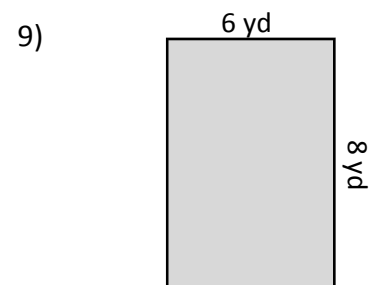
Area = _____

Perimeter = _____



Area = _____

Perimeter = _____

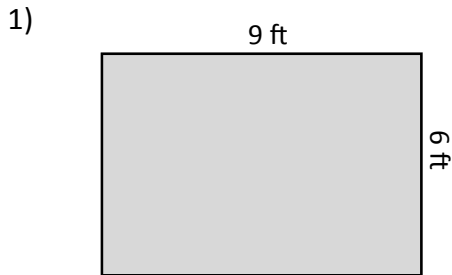


Area = _____

Perimeter = _____

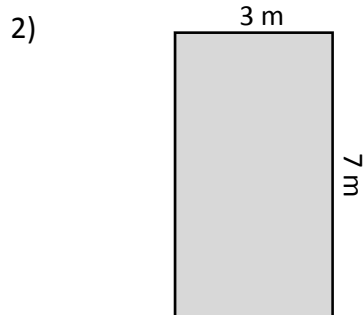
Answer Key

Find the area and perimeter of each rectangle.



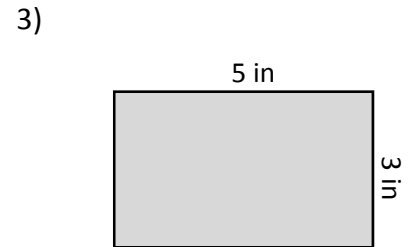
Area = **54 ft^2**

Perimeter = **30 ft**



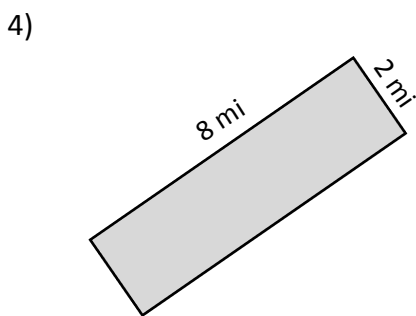
Area = **21 m^2**

Perimeter = **20 m**



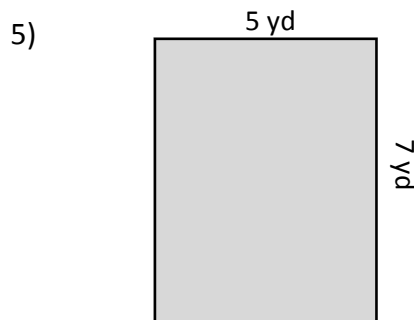
Area = **15 in^2**

Perimeter = **16 in**



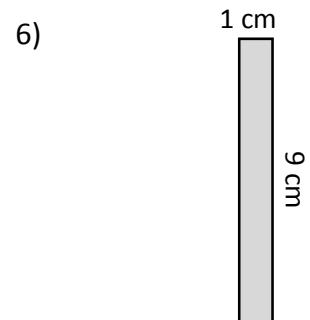
Area = **16 mi^2**

Perimeter = **20 mi**



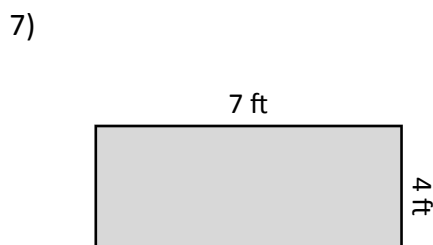
Area = **35 yd^2**

Perimeter = **24 yd**



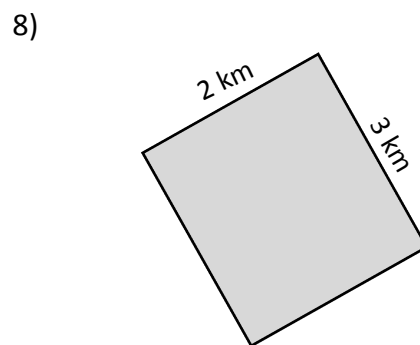
Area = **9 cm^2**

Perimeter = **20 cm**



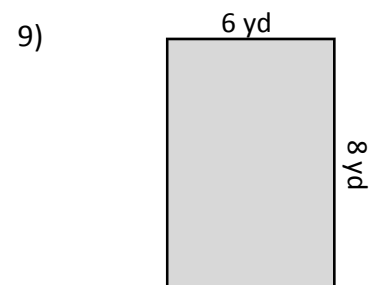
Area = **28 ft^2**

Perimeter = **22 ft**



Area = **6 km^2**

Perimeter = **10 km**



Area = **48 yd^2**

Perimeter = **28 yd**