

Name: _____

Score: _____

Area and Perimeter of Rectangles

Find the area and perimeter of each rectangle.

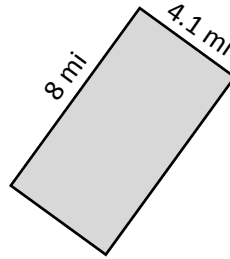
1)



Area = _____

Perimeter = _____

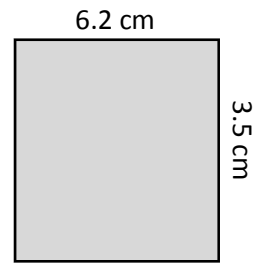
2)



Area = _____

Perimeter = _____

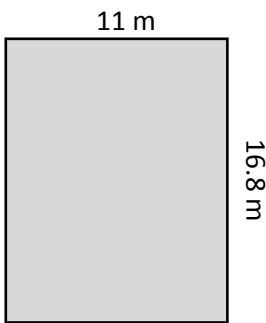
3)



Area = _____

Perimeter = _____

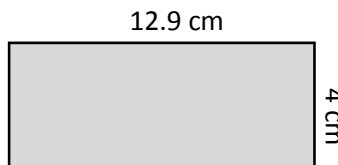
4)



Area = _____

Perimeter = _____

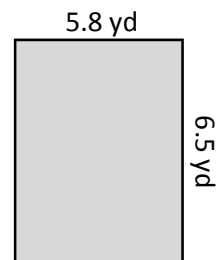
5)



Area = _____

Perimeter = _____

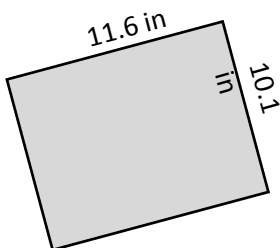
6)



Area = _____

Perimeter = _____

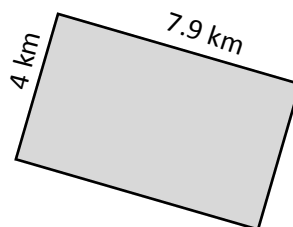
7)



Area = _____

Perimeter = _____

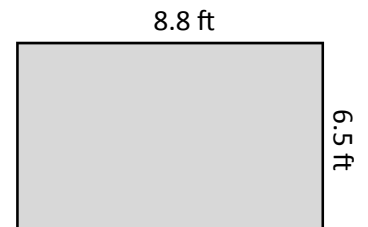
8)



Area = _____

Perimeter = _____

9)




Area = _____

Perimeter = _____

Answer Key

Find the area and perimeter of each rectangle.

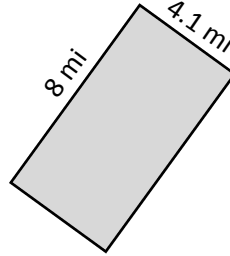
1)



Area = **17.1 in²**

Perimeter = **17.4 in**

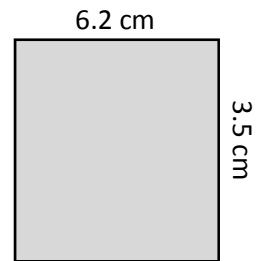
2)



Area = **32.8 mi²**

Perimeter = **24.2 mi**

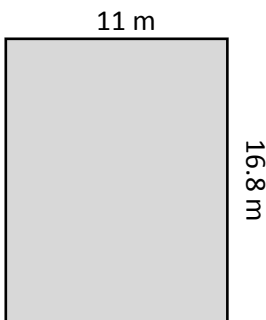
3)



Area = **21.7 cm²**

Perimeter = **19.4 cm**

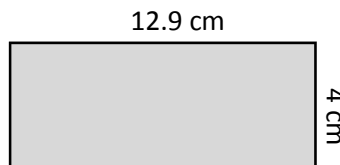
4)



Area = **184.8 m²**

Perimeter = **55.6 m**

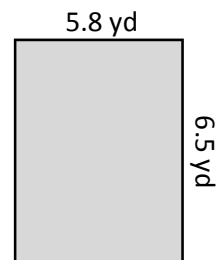
5)



Area = **51.6 cm²**

Perimeter = **33.8 cm**

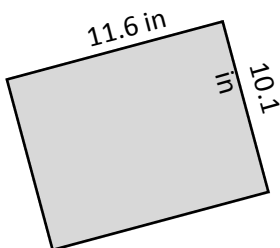
6)



Area = **37.7 yd²**

Perimeter = **24.6 yd**

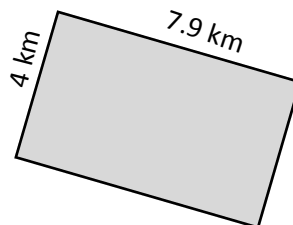
7)



Area = **117.16 in²**

Perimeter = **43.4 in**

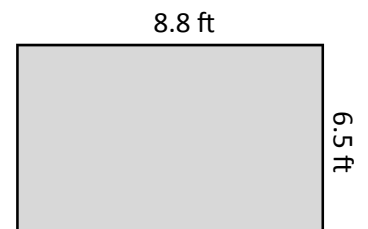
8)



Area = **31.6 km²**

Perimeter = **23.8 km**

9)



Area = **57.2 ft²**

Perimeter = **30.6 ft**