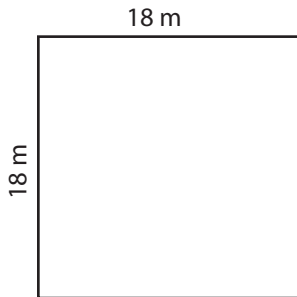


Square - Area & Perimeter

Find the area and perimeter of each square.

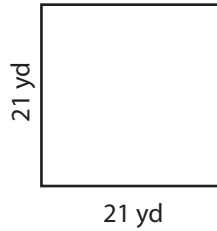
1)



Area : _____

Perimeter : _____

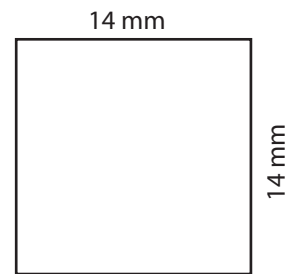
2)



Area : _____

Perimeter : _____

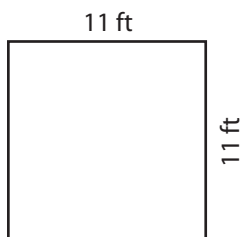
3)



Area : _____

Perimeter : _____

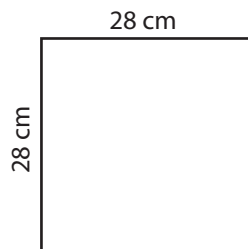
4)



Area : _____

Perimeter : _____

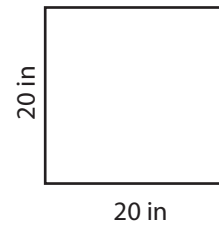
5)



Area : _____

Perimeter : _____

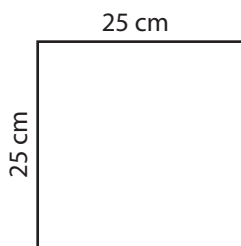
6)



Area : _____

Perimeter : _____

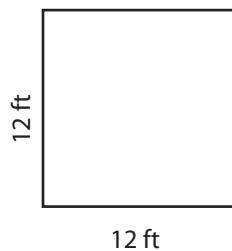
7)



Area : _____

Perimeter : _____

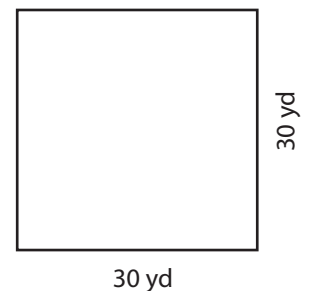
8)



Area : _____

Perimeter : _____

9)



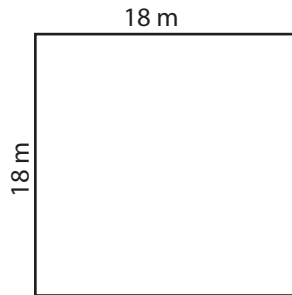
Area : _____

Perimeter : _____

Answer key

Find the area and perimeter of each square.

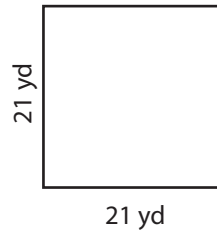
1)



Area : **324 m²**

Perimeter : **72 m**

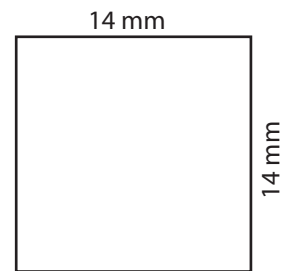
2)



Area : **441 yd²**

Perimeter : **84 yd**

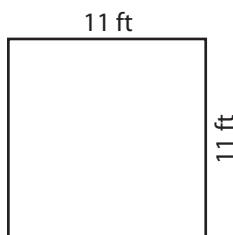
3)



Area : **196 mm²**

Perimeter : **56 mm**

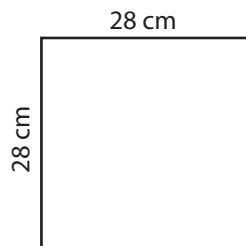
4)



Area : **121 ft²**

Perimeter : **44 ft**

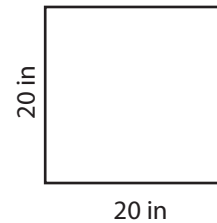
5)



Area : **784 cm²**

Perimeter : **112 cm**

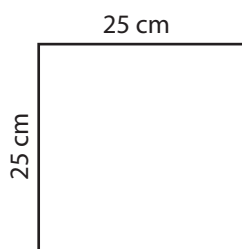
6)



Area : **400 in²**

Perimeter : **80 in**

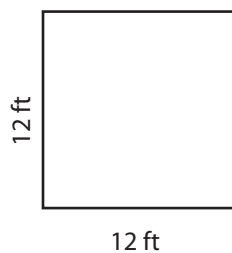
7)



Area : **625 cm²**

Perimeter : **100 cm**

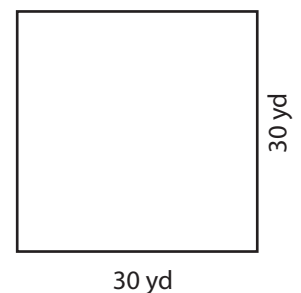
8)



Area : **144 ft²**

Perimeter : **48 ft**

9)



Area : **900 yd²**

Perimeter : **120 yd**