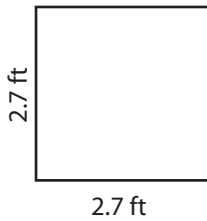


Square - Area & Perimeter

Find the area and perimeter of each square.

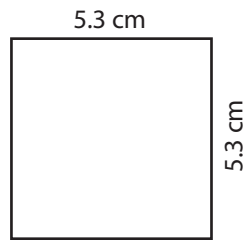
1)



Area : _____

Perimeter : _____

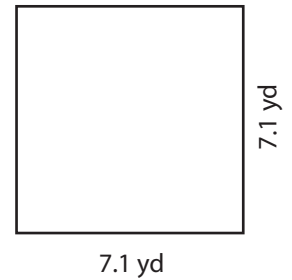
2)



Area : _____

Perimeter : _____

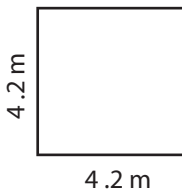
3)



Area : _____

Perimeter : _____

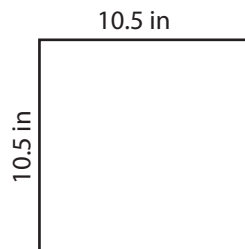
4)



Area : _____

Perimeter : _____

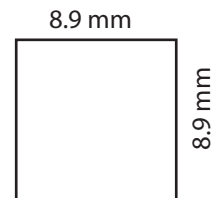
5)



Area : _____

Perimeter : _____

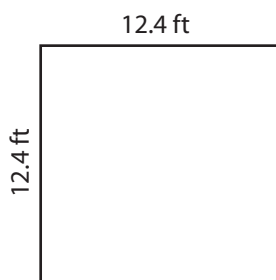
6)



Area : _____

Perimeter : _____

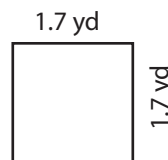
7)



Area : _____

Perimeter : _____

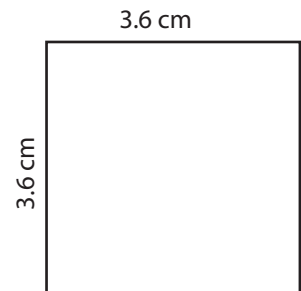
8)



Area : _____

Perimeter : _____

9)



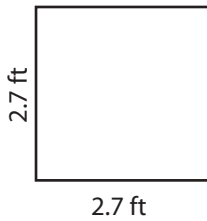
Area : _____

Perimeter : _____

Answer key

Find the area and perimeter of each square.

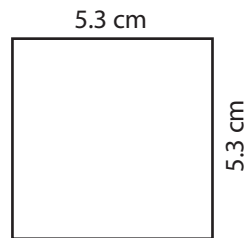
1)



Area : **7.29 ft²**

Perimeter : **10.8 ft**

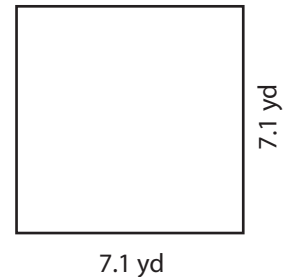
2)



Area : **28.09 cm²**

Perimeter : **21.2 cm**

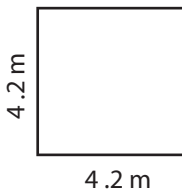
3)



Area : **50.41 yd²**

Perimeter : **28.4 yd**

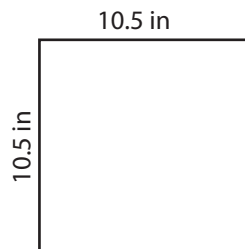
4)



Area : **17.64 m²**

Perimeter : **16.8 m**

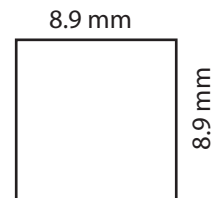
5)



Area : **110.25 in²**

Perimeter : **42 in**

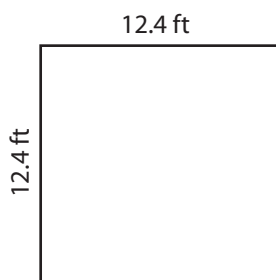
6)



Area : **79.21 mm²**

Perimeter : **35.6 mm**

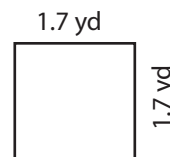
7)



Area : **153.76 ft²**

Perimeter : **49.6 ft**

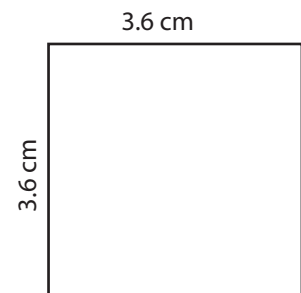
8)



Area : **2.89 yd²**

Perimeter : **6.8 yd**

9)



Area : **12.96 cm²**

Perimeter : **14.4 cm**