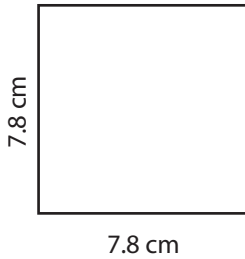


Square - Area & Perimeter

Find the area and perimeter of each square.

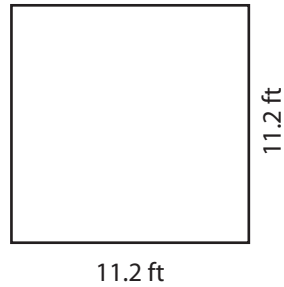
1)



Area : _____

Perimeter : _____

2)



Area : _____

Perimeter : _____

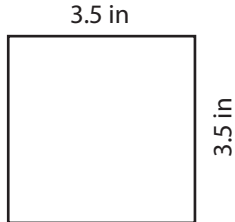
3)



Area : _____

Perimeter : _____

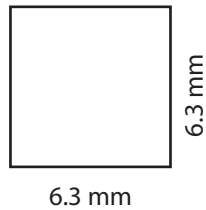
4)



Area : _____

Perimeter : _____

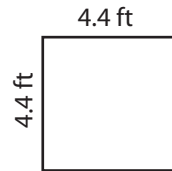
5)



Area : _____

Perimeter : _____

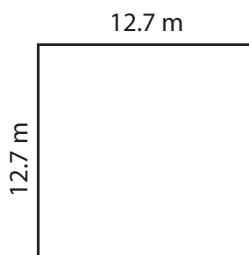
6)



Area : _____

Perimeter : _____

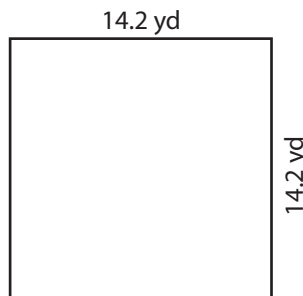
7)



Area : _____

Perimeter : _____

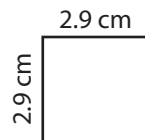
8)



Area : _____

Perimeter : _____

9)



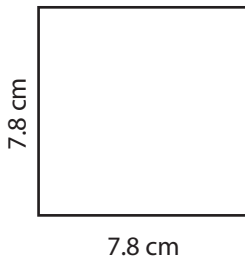
Area : _____

Perimeter : _____

Answer key

Find the area and perimeter of each square.

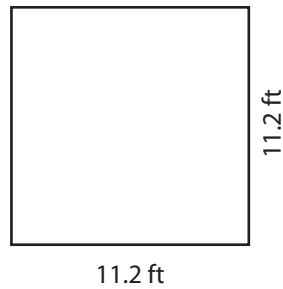
1)



Area : **60.84 cm²**

Perimeter : **31.2 cm**

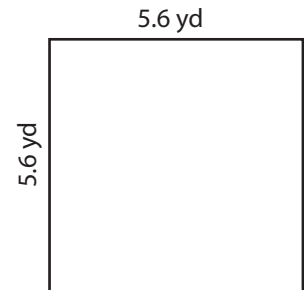
2)



Area : **125.44 ft²**

Perimeter : **44.8 ft**

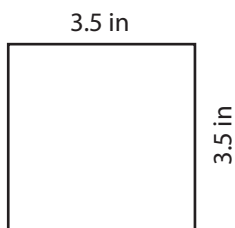
3)



Area : **31.36 yd²**

Perimeter : **22.4 yd**

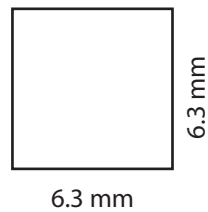
4)



Area : **12.25 in²**

Perimeter : **14 in**

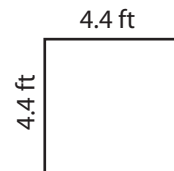
5)



Area : **39.69 mm²**

Perimeter : **25.2 mm**

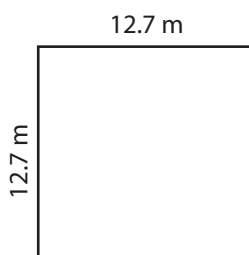
6)



Area : **19.36 ft²**

Perimeter : **17.6 ft**

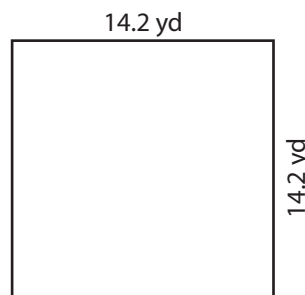
7)



Area : **161.29 m²**

Perimeter : **50.8 m**

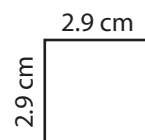
8)



Area : **201.64 yd²**

Perimeter : **56.8 yd**

9)



Area : **8.41 cm²**

Perimeter : **11.6 cm**