

Name : \_\_\_\_\_

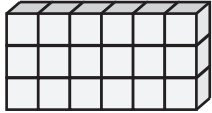
Score : \_\_\_\_\_

### Surface Area - Rectangular Prism

$\square = 1 \text{ cm}^2$


Find the surface area of each rectangular prism.

1)




Surface Area = \_\_\_\_\_

2)




Surface Area = \_\_\_\_\_

3)



Surface Area = \_\_\_\_\_

4)



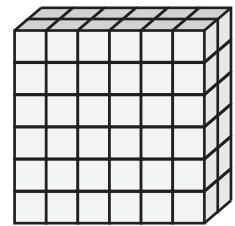
Surface Area = \_\_\_\_\_

5)



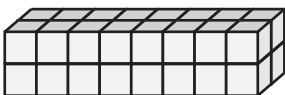
Surface Area = \_\_\_\_\_

6)




Surface Area = \_\_\_\_\_

7)



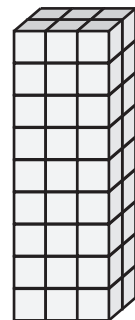
Surface Area = \_\_\_\_\_

8)



Surface Area = \_\_\_\_\_

9)



Surface Area = \_\_\_\_\_

Name : \_\_\_\_\_

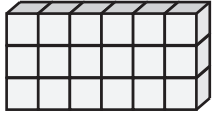
Score : \_\_\_\_\_

**Answer Key**

$\square = 1 \text{ cm}^2$


Find the surface area of each rectangular prism.

1)




Surface Area = 54 cm<sup>2</sup>

2)




Surface Area = 112 cm<sup>2</sup>

3)



Surface Area = 90 cm<sup>2</sup>

4)



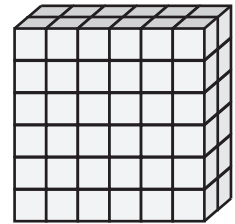
Surface Area = 102 cm<sup>2</sup>

5)



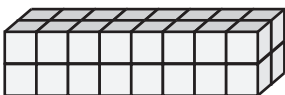
Surface Area = 88 cm<sup>2</sup>

6)



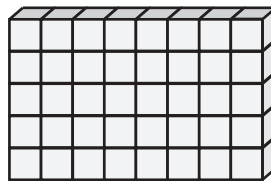
Surface Area = 120 cm<sup>2</sup>

7)



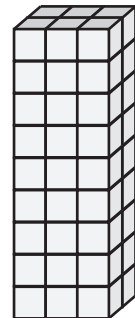
Surface Area = 72 cm<sup>2</sup>

8)



Surface Area = 106 cm<sup>2</sup>

9)



Surface Area = 102 cm<sup>2</sup>